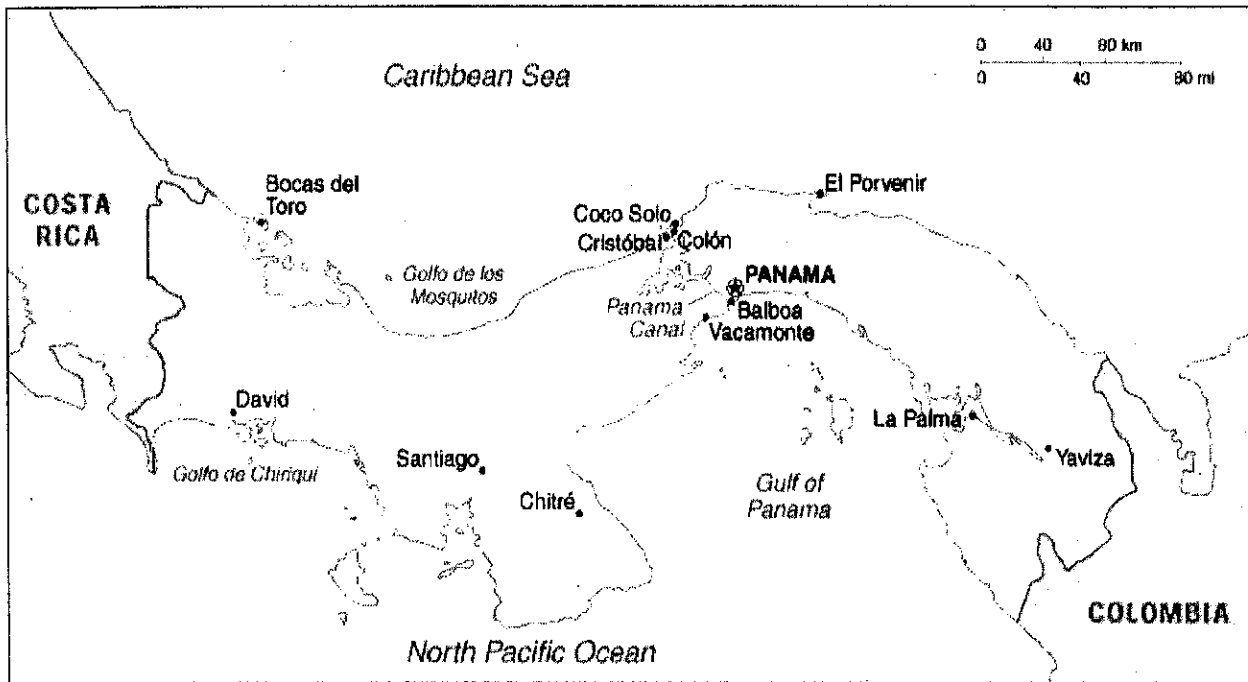


Name _____

Map Skills Packet

Map Skills (Directions)

Use the following map of Panama to answer the questions below.



1. In which direction would you travel if you went from David to El Porvenir?

2. In which direction would you travel if you went from Yaviza to La Palma?

3. In which direction would you travel if you went from Panama to Santiago?

4. In which direction would you travel if you went from Chitré to David?

5. In which direction would you travel if you went to Vacamonte from Bocas del Toro?

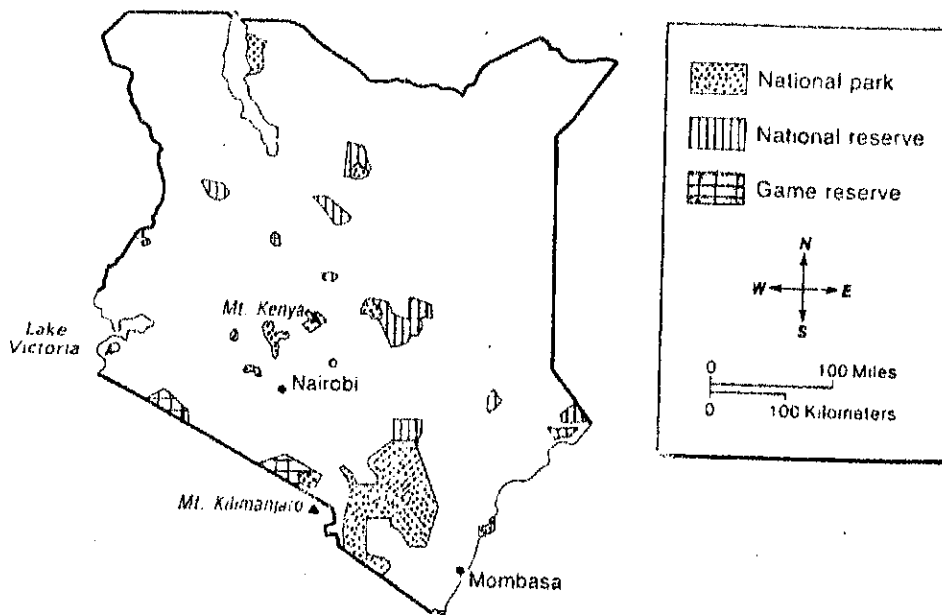


Name _____

Use with pages 6-13

Conservation in Kenya

Study the map and the map key below. Then put an X next to each sentence that makes a true statement according to the information in the map. For help, you can refer to pages 6-13 in your textbook.



- _____ 1. The only game reserve in Kenya is southeast of Lake Victoria.
- _____ 2. Mt. Kenya is located south of a national reserve.
- _____ 3. Mt. Kilimanjaro is located just east of the largest national park in Kenya.
- _____ 4. Nairobi is the site of the highest mountain peak in Kenya.
- _____ 5. Mombasa is northeast of a national park.
- _____ 6. Most of Kenya's national parks are located in the southern half of the country.
- _____ 7. Mt. Kilimanjaro is located about 160 miles south of Mt. Kenya.
- _____ 8. This map could help you learn the kind of plant and animal life you might see on a visit to Kenya.
- _____ 9. This map helps you understand where most of Kenya's protected lands are located.

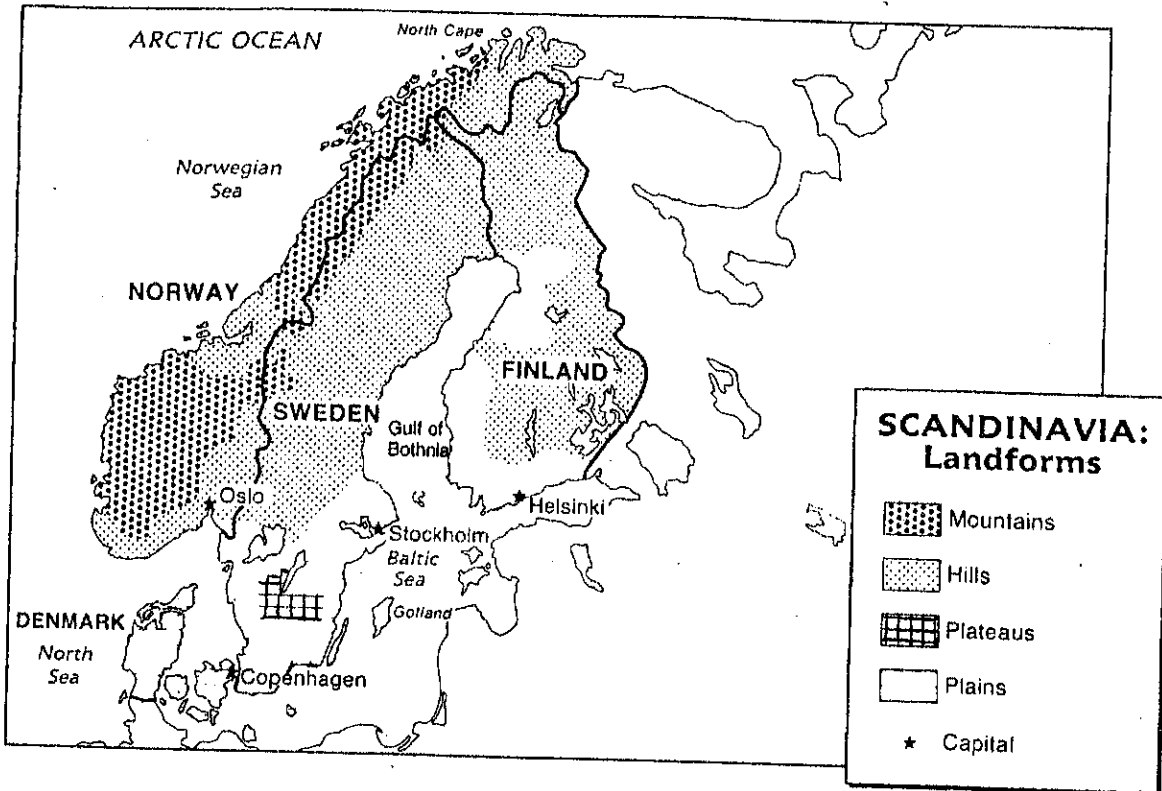


Name _____

Use with pages 6-13

Learning from Maps

Put an X next to each question you can answer based on information in the map. Then, use the space provided to answer each question marked with an X. For help, you can refer to pages 6-13 in your textbook.

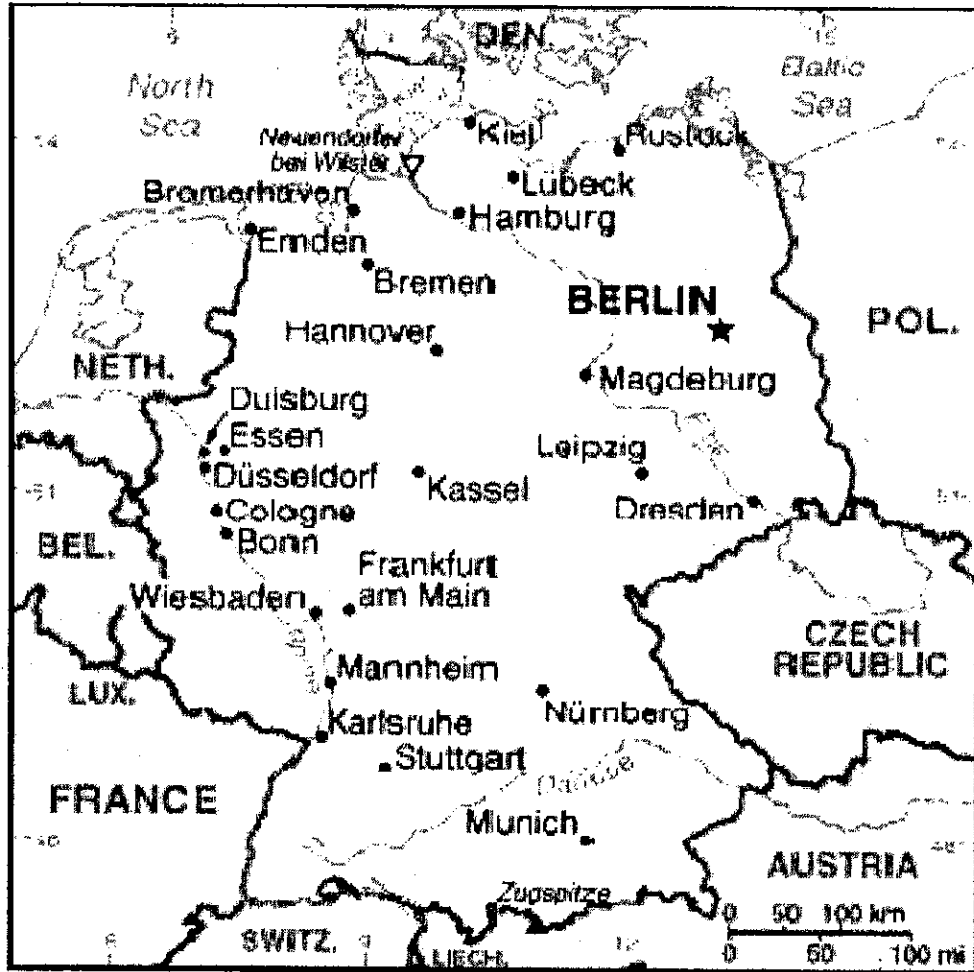


1. Which country has no mountains, hills, or plateaus? _____
2. Which country has the most people per square mile? _____
3. Which capital city is in a mountainous area? _____
4. What region of Scandinavia is tundra? _____
5. What is the capital city of Finland? _____
6. Which country in Scandinavia is the most mountainous? _____
7. Which country has the heaviest rainfall per year? _____
8. Which country has some plateaus? _____
9. Where would you expect to find desert vegetation? _____

Macmillan/McGraw-Hill

Map Skills (Distances)

Use the following map of Germany to answer the questions below.



1. How many miles is it from Bremen to Hannover? (within 10 miles)

2. How many kilometers is it from Hamburg to Berlin? (within 25 kilometers)

3. How many kilometers is it from Leipzig to Karlsruhe? (within 30 kilometers)

4. How many miles is it from Nürnberg to Lübeck? (within 20 miles)

5. How many miles is it from Cologne to Bonn? (within 5 miles)
